



Preface

'I love Maths' is a Maths assessment book written in accordance with the latest Singapore Ministry of Education 2021 syllabus for primary level.

This book, written for Primary 2 pupils, introduces the basic mathematical concepts and provides intensive practice to help pupils master the basic concepts of primary level mathematics. The book is written in a user-friendly manner so that pupils will find Mathematics an interesting subject.

The book includes Topical Exercises, Assessment Papers and detailed step-by-step worked-out solutions for pupil's easy understanding. Topical exercises contain questions which are graded from simple to challenging ones. This helps the pupil to learn the basic concepts in a gradual manner. The Assessment Papers help pupils gauge their understanding and progress in the subject while the detailed step-by-step solutions will serve as a good guide for parents to help their children.

Pupils will find this book to be a good supplement to their school textbooks and workbooks. The comprehensive coverage of the Primary 2 Syllabus makes this book a valuable and reliable resource for pupils, parents and teachers alike.

This book will guide pupils to have a very good understanding of the subject and improve their mathematical problem-solving skills.




Contents

| | |
|---------------------------------------|-----|
| 1. Numbers to 1000 | 2 |
| 2. Addition & Subtraction Within 1000 | 21 |
| 3. Length | 34 |
| 4. Multiplication and Division | 44 |
| 5. Multiplication Tables of 2, 5 & 10 | 51 |
| 6. Mass | 62 |
| Assessment 1 | 68 |
| 7. Time | 86 |
| 8. Addition and Subtraction | 97 |
| 9. Multiplication Tables of 3 & 4 | 107 |
| 10. Money | 115 |
| 11. Fractions | 129 |
| 12. Volume | 145 |
| 13. Picture Graphs | 154 |
| 14. Shapes | 162 |
| Assessment 2 | 172 |
| Answers | 193 |

2


Count the beads. Fill in the blanks. Then write in numerals and in words.

(a)



_____ hundreds _____ tens _____ ones = _____







(b)








_____ hundreds _____ tens _____ ones = _____

Comparing and Ordering Numbers

5 Circle the greater number.



6 Circle the smaller number.



3 Tick the more appropriate action for each time.

| | | | |
|------------|----------|------------------------|--|
| (a) | 12:25 pm | Lily takes her lunch. | |
| | | Lily takes her dinner. | |

| | | | |
|------------|---------|-------------------|--|
| (b) | 7:05 am | Vasu wakes up. | |
| | | Vasu goes to bed. | |

| | | | |
|------------|---------|-------------------------|--|
| (c) | 7:30 pm | Mila has her breakfast. | |
| | | Mila has her dinner. | |

| | | | |
|------------|---------|------------------------------|--|
| (d) | 3:00 am | Shan was doing her homework. | |
| | | Shan was sleeping. | |


| | | | |
|------------|---------|----------------------------|--|
| (e) | 9:55 am | Nilu had recess in school. | |
| | | Nilu had supper at home. | |

| | | | |
|------------|---------|------------------------------|--|
| (f) | 1:25 pm | Gita went to school. | |
| | | Gita went home after school. | |

| | | | |
|------------|----------|----------------------------------|--|
| (g) | 10:55 pm | Jena went home after the movies. | |
| | | Jena went for tuition. | |

| | | | |
|------------|---------|---------------------------|--|
| (h) | 6:45 pm | Abby watched the sunrise. | |
| | | Abby watched the sunset. | |

- 4 The picture graph below shows the number of members in different sports in a club.



Each  stands for 5 people.

- (a) _____ is the most favourite sport.
- (b) _____ is the least favourite sport.
- (c) _____ members have chosen basketball.
- (d) 35 members have chosen _____.
- (e) All the members in table-tennis decided to quit table-tennis and join basketball. Hence, the number of members in basketball sport is now _____.